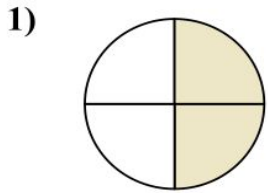
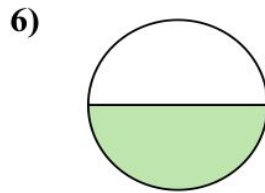


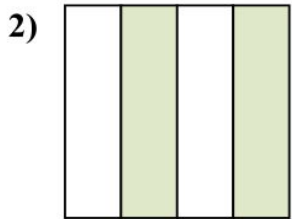
# Determine which letter best describes the shaded portion.



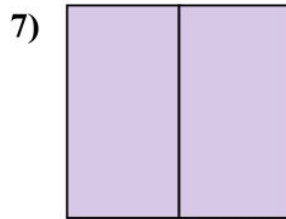
- A. four quarters
- B. two quarters
- C. two halves



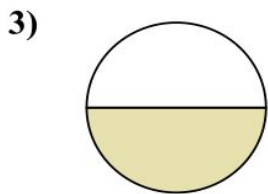
- A. three-fourths
- B. one half
- C. four quarters



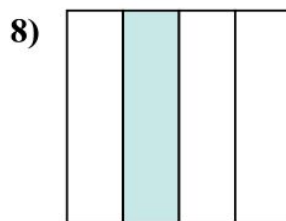
- A. three quarters
- B. two quarters
- C. four quarters



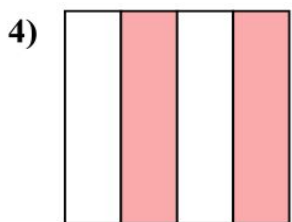
- A. three-fourths
- B. two halves
- C. one half



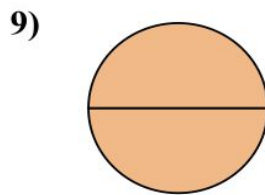
- A. one half
- B. two halves
- C. four-fourths



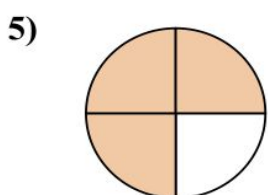
- A. two quarters
- B. three-fourths
- C. one quarter



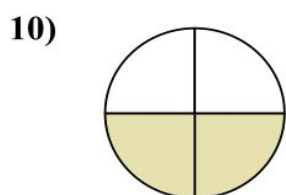
- A. four-fourths
- B. two-fourths
- C. one quarter



- A. two halves
- B. three quarters
- C. one half



- A. one half
- B. two quarters
- C. three-fourths



- A. three quarters
- B. one quarter
- C. two-fourths

## Answers

1.     **B**    

2.     **B**    

3.     **A**    

4.     **B**    

5.     **C**    

6.     **B**    

7.     **B**    

8.     **C**    

9.     **A**    

10.     **C**