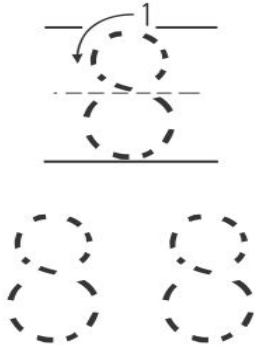




Is eight EVEN or ODD?
Color blue if even
and red if odd.



This is a 10 frame. Can you show what 8 looks like in a 10 frame.



Cut the numbers out at the bottom of the page.
Answer the questions below and glue the numbers in the correct spots.



8 is 5 plus

8 - 2 =

4 + = 8

$$2 + 6 = \square$$

$$\square + 1 = 8$$

$$8 - 3 = \square$$

$$8 + \square = 8$$

$$\square + 7 = 8$$

$$8 - 6 = \square$$

