


# BUILDING BRICK ADDITION OR SUBTRACTION!

Can you add up the bumps on the building bricks?



+




=

\_\_\_\_\_




-



=

\_\_\_\_\_




+




=

\_\_\_\_\_



-



=

\_\_\_\_\_




+




=

\_\_\_\_\_



-



=

\_\_\_\_\_