

# NUMBER LINE SUBTRACTION

—

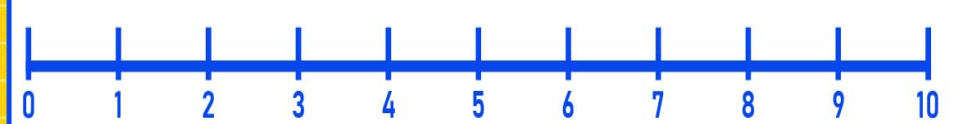
×

Finish the number sentences. Use the number lines to help.

$5 - 2$




$6 - 3$



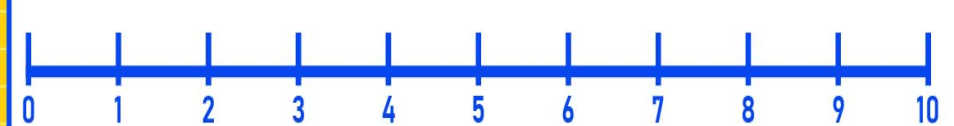
$9 - 4$




$4 - 1$



$2 - 2$



$8 - 6$



$9 - 7$



$5 - 4$



$10 - 7$



$7 - 5$

